




ACTIVITY

Do you know biking signals and signs?

Draw a line to match each sign and signal to the correct meaning.



Bikes not allowed

Left hand turn

Stop

Bike Lane

Right hand turn